

Motion

Kinematics - the study of motion

Scalar quantity - has size (magnitude) only

25s, 25 km, 30g

vector quantity - has size and direction

2.8 km [E], 5.2 m [up], 32 km [E 30° S]
h

Position (\vec{d}) - the location of an object
(vector) with respect to a reference point

$$\vec{d} = 5 \text{ km [w]}$$

distance (Δd) - how far the object has travelled
(scalar)

$$\Delta d = 100 \text{ km}$$

displacement ($\Delta \vec{d}$) - where the object is now in
(vector) relation to where it started
or the change in position

$$\Delta \vec{d} = 125 \text{ km [E]}$$

$$\Delta \vec{d} = \vec{d}_f - \vec{d}_i$$

time interval (Δt) - the time that it takes for the motion (s)

(Scalar!)

t_i - the initial time (s)

t_f - the final time (s)

$$\Delta t = t_f - t_i$$

speed (v) - how fast; the rate at which the distance is covered

(Scalar)

Scalar

$$10 \frac{\text{km}}{\text{h}}, \quad 32 \frac{\text{m}}{\text{s}}$$

velocity (\vec{v}) - the rate at which the position changes

(vector)

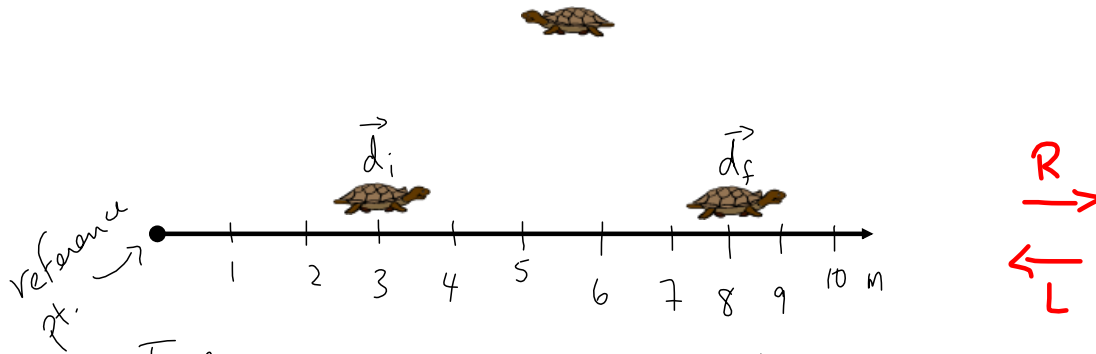
(displacement)

$$52 \frac{\text{km}}{\text{h}} [\text{E}], \quad 3.1 \frac{\text{m}}{\text{s}} [\text{W}]$$

Remember:

speed \rightarrow use distance (scalar)

velocity \rightarrow use displacement (vector)



To find the displacement of the turtle:

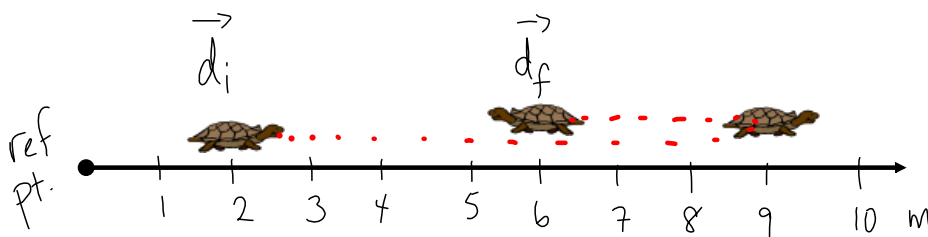
$$\Delta \vec{d} = \vec{d}_f - \vec{d}_i \quad \vec{d}_i = 3\text{m} [R]$$

$$\Delta \vec{d} = 8\text{m} [R] - 3\text{m} [R] \quad \vec{d}_f = 8\text{m} [R]$$

$$\Delta \vec{d} = 5\text{m} [R]$$

turtle went 5m to the right of its starting pt.

The distance travelled: $\Delta d = 5\text{m}$



Displacement: $\Delta \vec{d} = \vec{d}_f - \vec{d}_i \quad \vec{d}_i = 2\text{m} [R]$

$$\Delta \vec{d} = 6\text{m} [R] - 2\text{m} [R] \quad \vec{d}_f = 6\text{m} [R]$$

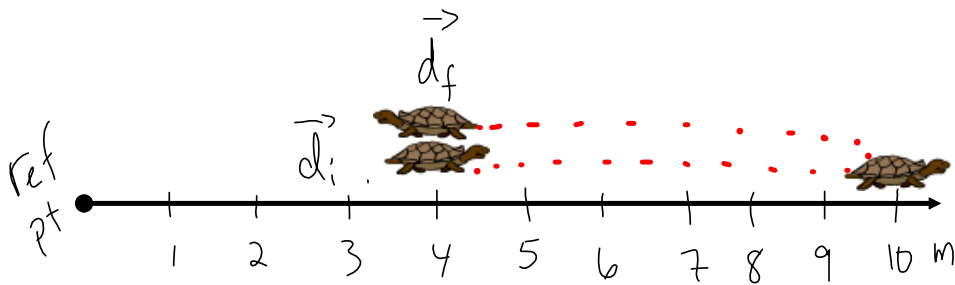
Where the turtle is now in relation to where it started

$$\Delta \vec{d} = 4\text{m} [R]$$

Distance (how far the turtle travelled):

$$\Delta d = 7\text{m} + 3\text{m}$$

$$\Delta d = 10\text{m}$$



Displacement:

$$\vec{d}_i = 4\text{m}[\text{R}]$$

$$\vec{d}_f = 4\text{m}[\text{R}]$$

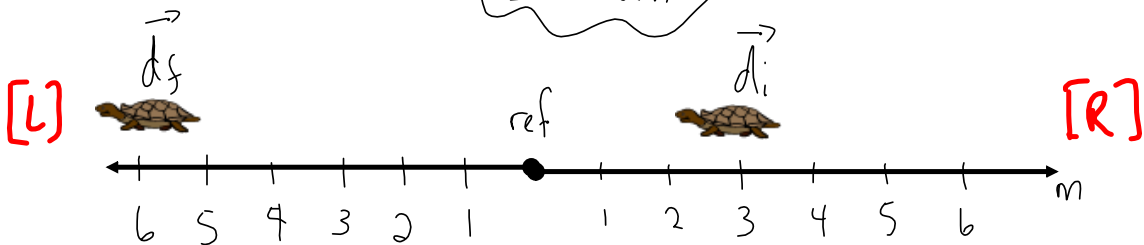
$$\Delta\vec{d} = \vec{d}_f - \vec{d}_i$$

$$\Delta\vec{d} = 4\text{m}[\text{R}] - 4\text{m}[\text{R}]$$

$$\Delta\vec{d} = 0\text{m}$$

Distance: $\Delta d = 6\text{m} + 6\text{m}$

$$\Delta d = 12\text{m}$$



Displacement:

$$\Delta\vec{d} = \vec{d}_f - \vec{d}_i$$

$$\Delta\vec{d} = 6\text{m}[\text{L}] - 3\text{m}[\text{R}]$$

$$\Delta\vec{d} = 6\text{m}[\text{L}] - (-3\text{m}[\text{L}])$$

$$\Delta\vec{d} = 6\text{m}[\text{L}] + 3\text{m}[\text{L}]$$

$$\Delta\vec{d} = 9\text{m}[\text{L}]$$

$3\text{m}[\text{R}] = -3\text{m}[\text{L}]$

can't do the math with different directions

Distance: $\Delta d = 9\text{m}$