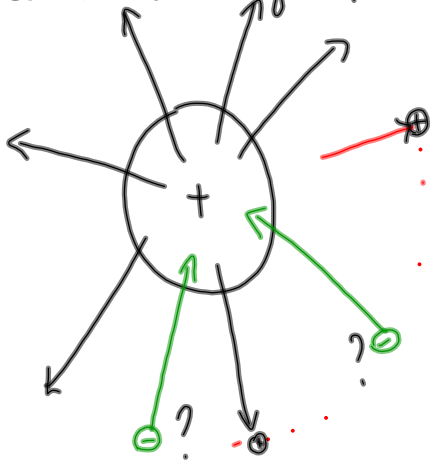


§14.2 Describing Fields


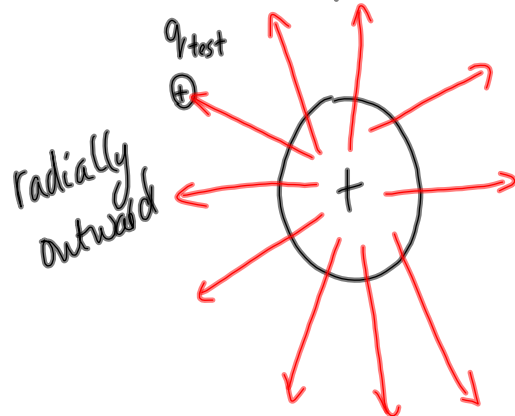
Consider a charged sphere



The electric field is due to all the force vectors acting on charge at certain distance from the source of the field.

What about the direction?

We use a positive test charge to determine the direction of the field.



Electric Field Strength (Intensity) is the force per unit charge:

$$\vec{E} = \frac{\vec{F}_q}{q}$$

Where \vec{E} is the electric field intensity (N/C)

\vec{F}_q is the force acting on the charge (N)

q is the charge that experiences the force (C)

MP/645

$$q_{\text{test}} = +2.0 \times 10^{-9} \text{ C}$$

$$\vec{F}_Q = 4.0 \times 10^{-9} \text{ N [W]}$$

$$a) \vec{E} = ?$$

$$b) F_Q = ?$$

$$(q = +9.0 \times 10^{-6} \text{ C})$$

$$b) \vec{E} = \frac{\vec{F}_Q}{q}$$

$$\vec{F}_Q = q \vec{E}$$

$$\vec{F}_Q = (9.0 \times 10^{-6} \text{ C}) \left(2.0 \frac{\text{N}}{\text{C}} [\text{W}] \right)$$

$$\vec{F}_Q = 1.8 \times 10^{-5} \text{ N [W]}$$

$$\leftarrow 4.0 \times 10^{-9} \text{ N [W]}$$

⊕

$$q_{\text{test}} \\ +2.0 \times 10^{-9} \text{ C}$$

$$a) \vec{E} = \frac{\vec{F}_Q}{q}$$

$$\vec{E} = \frac{4.0 \times 10^{-9} \text{ N [W]}}{2.0 \times 10^{-9} \text{ C}}$$

$$\vec{E} = 2.0 \frac{\text{N}}{\text{C}} [\text{W}]$$

Gravitational Field Intensity

The force of gravity per unit mass.

$$\vec{g} = \frac{\vec{F}_g}{m} \quad (\vec{F}_g = m\vec{g})$$

Where \vec{g} is the gravitational field strength (N/kg)

\vec{F}_g is the force of gravity acting on the mass (N) converts to m/s^2

m is the mass that experiences the force (kg)

MP/648

$$m = 4.60 \text{ kg}$$

$$\vec{F}_g = 45.1 \text{ N} \quad [\text{towards the centre of planet}]$$

a) $\vec{g} = ?$

b) What does it mean?

$$\vec{g} = \frac{\vec{F}_g}{m}$$

$$\vec{g} = \frac{45.1 \text{ N} [\text{towards the centre}]}{4.60 \text{ kg}}$$

$$\vec{g} = 9.80 \frac{\text{N}}{\text{kg}} \quad [\text{towards the centre}]$$

↑
The planet is Earth!

To DO:

① PP/646-647 (\vec{E})

② PP/649 (\vec{g})