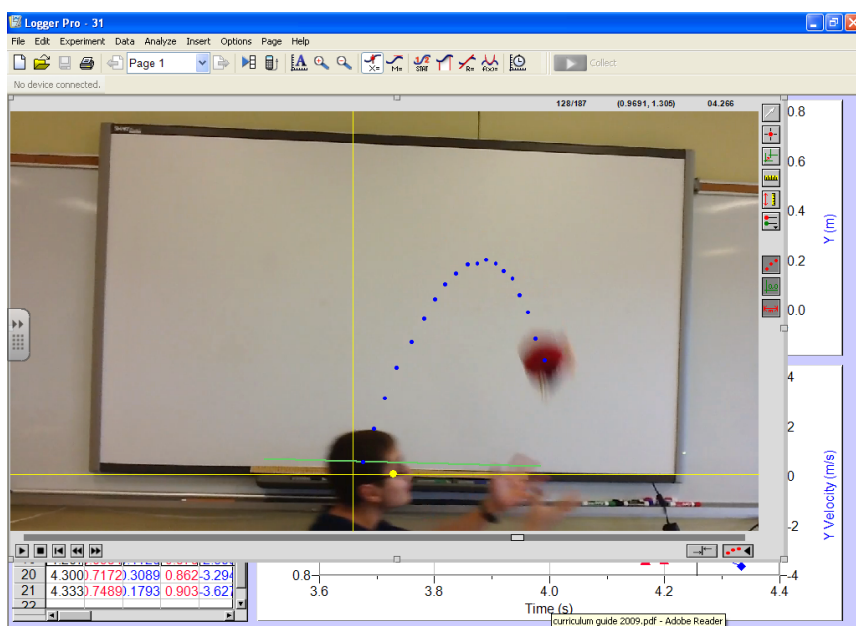


Relative Velocity

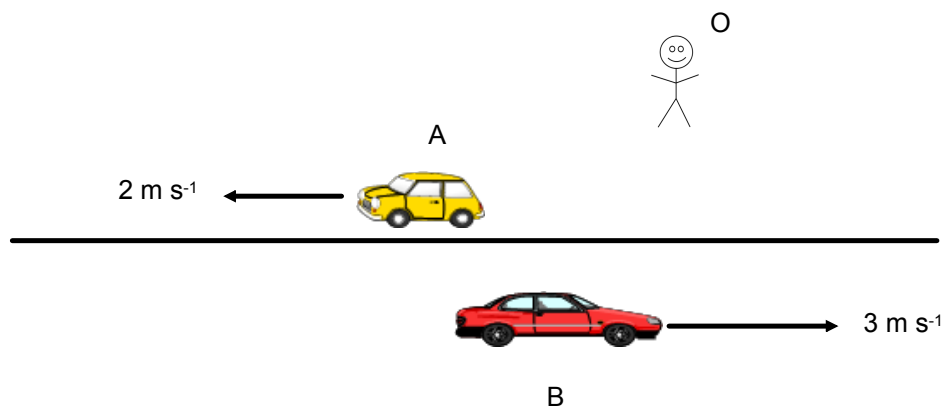
The motion of a ball thrown up in a train depends on the observer's frame of reference.

To the observer in the train..... *ball goes straight up/down*

To the observer outside the train..... *ball follows a parabolic trajectory*



Relative Velocity in one dimension



What is the velocity of B relative to A?

$$5 \text{ m s}^{-1} [\text{E}]$$

$$\begin{aligned}
 \vec{v}_{B/A} &= \vec{v}_{B/O} - \vec{v}_{A/O} \\
 &= 3 \text{ m s}^{-1} [\text{E}] - 2 \text{ m s}^{-1} [\text{W}] \\
 &= 3 \text{ m s}^{-1} [\text{E}] - (-2 \text{ m s}^{-1} [\text{E}]) \\
 &= 5 \text{ m s}^{-1} [\text{E}]
 \end{aligned}$$

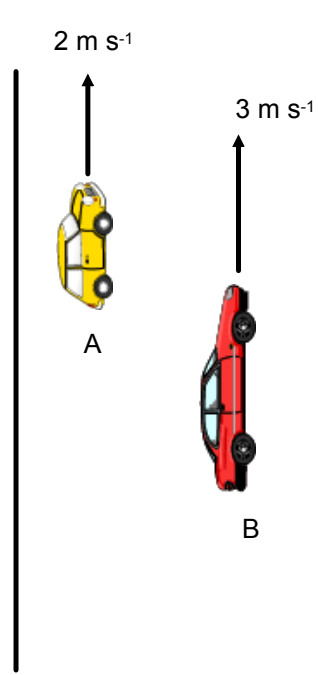
Example:

What is the velocity of A relative to B?

What is the velocity of B relative to A?

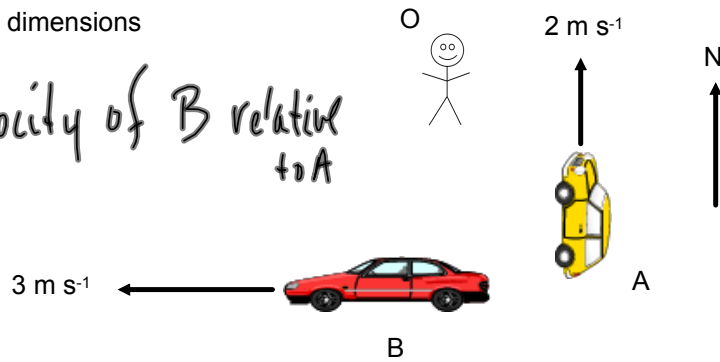
$1 \text{ m s}^{-1} \text{ [S]}$

$1 \text{ m s}^{-1} \text{ [N]}$



Relative velocity in two dimensions

What is the velocity of B relative to A

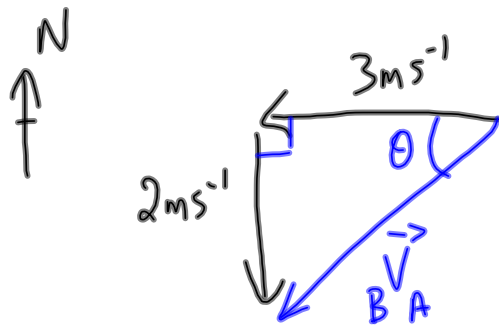


$$\vec{V}_{B/A} = \vec{V}_{B/O} - \vec{V}_{A/O}$$

$$\vec{V}_{B/A} = 3\text{ms}^{-1}[\text{W}] - 2\text{ms}^{-1}[\text{N}]$$

$$\vec{V}_{B/A} = 3\text{ms}^{-1}[\text{W}] + (-2\text{ms}^{-1}[\text{N}])$$

$$\vec{V}_{B/A} = 3\text{ms}^{-1}[\text{W}] + 2\text{ms}^{-1}[\text{S}]$$



$$c^2 = a^2 + b^2$$

$$c^2 = (2\text{ms}^{-1})^2 + (3\text{ms}^{-1})^2$$

$$c = 3.6\text{ms}^{-1}$$

$$c = 4\text{ms}^{-1}$$

$$\vec{V}_{B/A} = 4\text{ms}^{-1}[\text{W}34^{\circ}\text{S}]$$

$$\tan \theta = \frac{2\text{ms}^{-1}}{3\text{ms}^{-1}}$$

$$\theta = 34^{\circ}$$