

PP/168

b.  $m = 1.2 \times 10^3 \text{ kg}$   $\times \frac{1000}{3600}$

$\vec{v}_1 = 45 \text{ km/h [w]}$

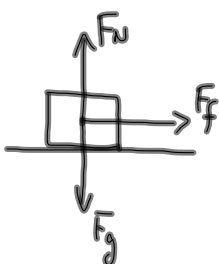
$\vec{v}_2 = 0 \text{ km/h}$   $12.5 \text{ m/s}$   $a = ?$

$\Delta d = 35 \text{ m}$

$\mu = ??$

[w]  
←  
+

Draw a FBD.



$$\vec{F}_{\text{net}} = m\vec{a}$$

$$-F_f = ma$$

$$F_f = -(1.2 \times 10^3 \text{ kg})(-2.2 \text{ m/s}^2)$$

$$F_f = 2.7 \times 10^3 \text{ N}$$

Find the acceleration of the car  
while braking:

$$v_2^2 = v_1^2 + 2ad$$

$$\frac{v_2^2 - v_1^2}{2ad} = \frac{2ad}{2ad}$$

$$a = \frac{v_2^2 - v_1^2}{2ad}$$

$$a = \frac{0^2 - (12.5 \text{ m/s})^2}{2(35 \text{ m})}$$

$$a = -2.2 \text{ m/s}^2$$

$$F_f = \mu F_N$$

$$\mu = \frac{F_f}{F_N}$$

$$\mu = \frac{F_f}{F_g}$$

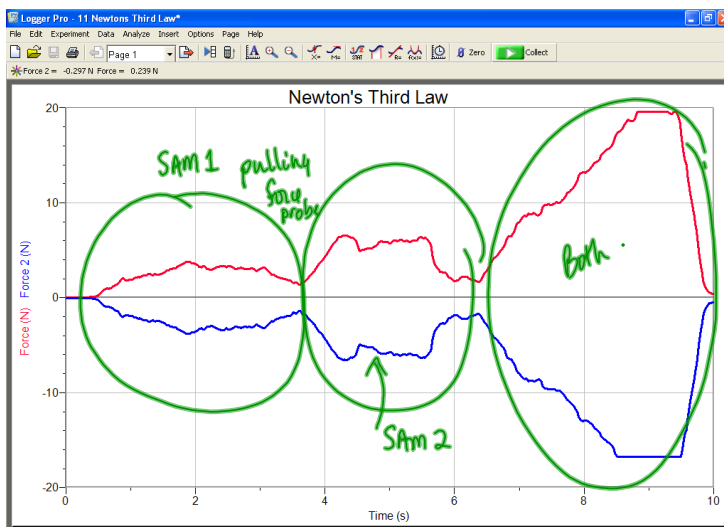
$$\mu = \frac{F_f}{mg}$$

$$\mu = \frac{2.7 \times 10^3 \text{ N}}{(1.2 \times 10^3 \text{ kg})(9.8 \text{ m/s}^2)}$$

$$\mu = 0.23$$

# Newton's Third Law (Action-Reaction)

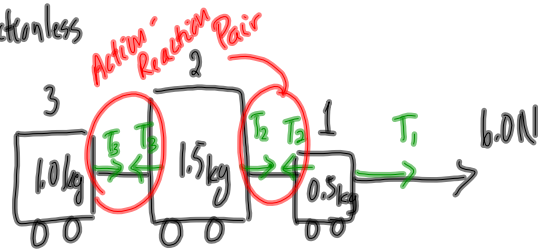
For every action force on object A due to object B, there is a reaction force, equal in magnitude & opposite in direction, due to object A acting on object B.



$$\vec{F}_{A \text{ on } B} = - \vec{F}_{B \text{ on } A}$$

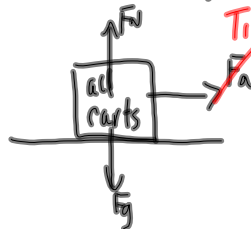
Example - A Child's Pull Toy

- frictionless



- a) acceleration of the toy?
- b) what is the force (tension) in each string

a) The Applied force of 6.0N acts on all 3 carts (a total mass of 3.0kg)



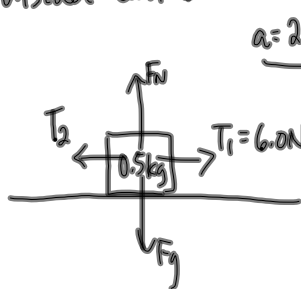
$$\vec{F}_{net} = m\vec{a}$$

$$T_1 = ma$$

$$(6.0N) = (3.0kg)a$$

$a = 2.0m/s^2$

b) Consider cart 1:



$$\vec{F}_{net} = m\vec{a}$$

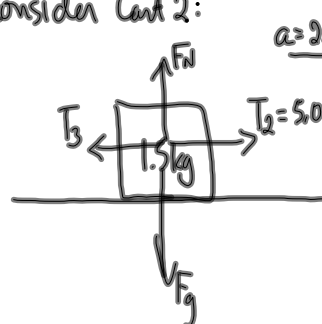
$$T_1 - T_2 = ma$$

$$6.0N - T_2 = (0.5kg)(2.0m/s^2)$$

$$6.0N - T_2 = 1.0N$$

$T_2 = 5.0N$

Consider Cart 2:



$$\vec{F}_{net} = m\vec{a}$$

$$T_2 - T_3 = ma$$

$$5.0N - T_3 = (1.5kg)(2.0m/s^2)$$

$$5.0N - T_3 = 3.0N$$

$T_3 = 2.0N$

See also MP/180

Apparent Weight

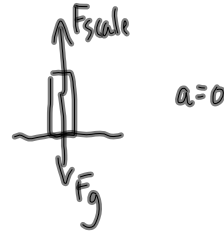
mp/184

$m = 55 \text{ kg}$

a)  $F_{\text{scale}} = ??$  (not moving)

b)  $F_{\text{scale}} = ??$  ( $\vec{a} = 0.75 \text{ m/s}^2$  [up])

a) not moving... draw a FBD.



$F_{\text{scale}} = F_g$

$F_{\text{scale}} = mg$

$F_{\text{scale}} = (55 \text{ kg})(9.81 \text{ m/s}^2)$

feel like

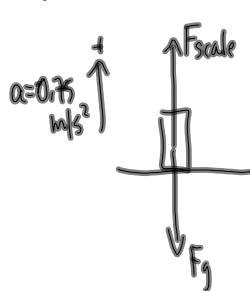
normal

weight

$F_{\text{scale}} = 539.55 \text{ N}$

$F_{\text{scale}} = 5.4 \times 10^2 \text{ N}$

b)  $\vec{a} = 0.75 \text{ m/s}^2$  [up]



$\vec{F}_{\text{net}} = m\vec{a}$

$F_{\text{scale}} - F_g = ma$

$F_{\text{scale}} = ma + F_g$

$F_{\text{scale}} = (55 \text{ kg})(0.75 \text{ m/s}^2) + 539.55 \text{ N}$

feel "heavier"

$F_{\text{scale}} = 5.8 \times 10^2 \text{ N}$

ON feel weightless

Positive accelerations make you feel heavier  
(going up / speeding up  
+ going down / slowing down)

Negative accelerations make you feel lighter  
(going up / slowing down  
+ going down / speeding up)

TO DO

① PP/182/18+19 (towing)

② PP/186 (apparent weight)